


ANSWERS

Paper 1 style questions

Paper 2 & 3 style questions


Arithmetic Paper Fractions

$$\frac{3}{7} \times 490 = 210$$



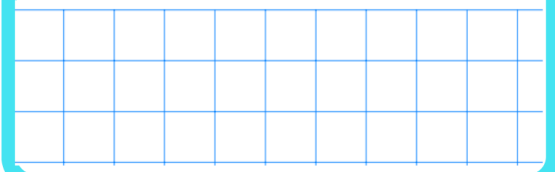
Arithmetic Paper Fractions

$$\frac{2}{5} + \frac{1}{2} = \frac{9}{10}$$



Arithmetic Paper Fractions

$$\frac{4}{6} - \frac{3}{8} = \frac{7}{24}$$



Reasoning Style Fractions

Taelyn and Elliot each have pizzas the same size.

Taelyn's pizza is cut into 6 slices and Elliot's pizza is cut into 9 pieces.



Taelyn eats 4 the slices and Elliot eats 5 slices. Who has eaten more?

Taelyn

Reasoning Style Fractions

Fill in the boxes to make 4 equivalent fractions

$$\frac{\boxed{1}}{2}$$


$$\frac{2}{4}$$

$$\frac{4}{\boxed{8}}$$

$$\frac{\boxed{6}}{12}$$

Arithmetic Paper Fractions

$$\frac{2}{3} + 1\frac{1}{2} = 2\frac{1}{6}$$



Reasoning Style Fractions

Use < = > to make the statements true


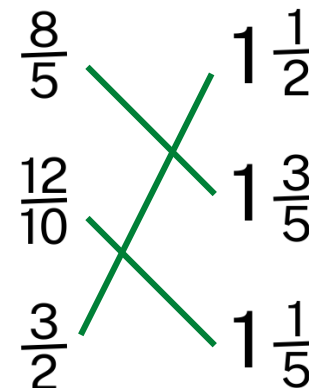
$$\frac{2}{5} \quad \boxed{<} \quad \frac{1}{2}$$

$$\frac{3}{8} \quad \boxed{>} \quad \frac{1}{4}$$

$$\frac{4}{6} \quad \boxed{=} \quad \frac{2}{3}$$

Reasoning Style Fractions

Match the improper fractions to its mixed number



SATS EBOOKS & REVISION

Focus on Fractions

ADDING FRACTIONS
Week 1

My Pocket Private Tutor

ARITHMETIC ACADEMY
YEAR 6 SATS practice
Year 6 Arithmetic Academy
£9.99

KEY STAGE TWO SATS REVISION
YEAR 6 NUMBER
Fractions - Decimals - Percentages

KEY STAGE TWO SATS REVISION
YEAR 6 RATIO & PROPORTION

KEY STAGE TWO SATS REVISION
YEAR 6 ALGEBRA

KEY STAGE TWO SATS REVISION
YEAR 6 GEOMETRY
Properties - Position & Direction

KEY STAGE TWO SATS REVISION
YEAR 6 MEASUREMENT

KEY STAGE TWO SATS REVISION
YEAR 6 STATISTICS

KEY STAGE TWO SATS REVISION
YEAR 6 NUMBER
Calculations

2016 Paper 2 Q17

1) A packet contains 1.5kg of oats.

Every day Mark uses 50g of oats to make porridge.

How many days does the packet of oats last?

709 + = 1023

Arithmetic Paper style Q

6.2 - 0.35 =

Arithmetic Paper style Q

45 - 6 x 3 =

Arithmetic Paper style Q

420 ÷ 60 =

SATS Revision grids

Calculation word problem

A TikTok video received 6,397 views in the first 24 hours and another 5,135 views the following day.

a) How many views does it have after 48 hours?

b) How many more views does it need to reach 30,000?

Measurement word problem

1) A bag of rice costs 90p per kg. If a bag of rice costs £2.25. What does it weigh in grams?

2) A pack of six 2 litre bottles of water cost £3.60. A 1 litre bottle of water costs £0.55. Which drink is cheaper? Explain your reasoning

Roman Numerals

Use < = >

MDCXCIII 1925

MMCCXVII 2301

DCCLIX 818

Tutorials covering the full Year 6 National Curriculum

Focused revision courses

Standalone assessments with report

Practice Arithmetic tests



Past SATs question examples